

Write your name here

Surname

Other names

**Pearson Edexcel**  
**International**  
**Advanced Level**

Centre Number

--	--	--	--	--	--

Candidate Number

--	--	--	--	--	--

# Chemistry

**Advanced Subsidiary**

**Unit 2: Application of Core Principles of Chemistry**

Tuesday 2 June 2015 – Afternoon

**Time: 1 hour 30 minutes**

Paper Reference

**WCH02/01**

**Candidates may use a calculator.**

Total Marks

## Instructions

- Use **black** ink or ball-point pen.
- **Fill in the boxes** at the top of this page with your name, centre number and candidate number.
- Answer **all** questions.
- Answer the questions in the spaces provided  
– *there may be more space than you need.*

## Information

- The total mark for this paper is 80.
- The marks for **each** question are shown in brackets  
– *use this as a guide as to how much time to spend on each question.*
- Questions labelled with an **asterisk** (\*) are ones where the quality of your written communication will be assessed  
– *you should take particular care with your spelling, punctuation and grammar, as well as the clarity of expression, on these questions.*
- A Periodic Table is printed on the back cover of this paper.

## Advice

- Read each question carefully before you start to answer it.
- Keep an eye on the time.
- Try to answer every question.
- Check your answers if you have time at the end.

Turn over ►

P44882A

©2015 Pearson Education Ltd.

6/6/5/3/



**PEARSON**

## SECTION A

Answer ALL the questions in this section. You should aim to spend no more than 20 minutes on this section. For each question, select one answer from A to D and put a cross . If you change your mind, put a line through the box  and then mark your new answer with a cross .

1 A flame test was carried out on a mixture of magnesium chloride and potassium chloride. The flame colour observed was

- A white and lilac.
- B orange.
- C lilac.
- D bright white, which masks any other colour.

(Total for Question 1 = 1 mark)

2 The equation for the reaction of lithium with excess water is

- A  $2\text{Li(s)} + 2\text{H}_2\text{O(l)} \rightarrow \text{Li}_2\text{O}_2\text{(s)} + 2\text{H}_2\text{(g)}$
- B  $2\text{Li(s)} + \text{H}_2\text{O(l)} \rightarrow \text{Li}_2\text{O(s)} + \text{H}_2\text{(g)}$
- C  $\text{Li(s)} + \text{H}_2\text{O(l)} \rightarrow \text{LiOH(s)} + \frac{1}{2}\text{H}_2\text{(g)}$
- D  $2\text{Li(s)} + 2\text{H}_2\text{O(l)} \rightarrow 2\text{LiOH(aq)} + \text{H}_2\text{(g)}$

(Total for Question 2 = 1 mark)

3 Solid sodium is reacted with chlorine gas and the product of this reaction is added to water. This gives

- A an insoluble white crystalline solid.
- B a colourless solution.
- C a pale green solution.
- D a cloudy white mixture.

(Total for Question 3 = 1 mark)



4 The solids barium hydroxide and barium sulfate are similar in

- A their colours.
- B the pH of their solutions.
- C their reactions with hydrochloric acid.
- D their solubility in water.

(Total for Question 4 = 1 mark)

5 The solids magnesium carbonate and magnesium nitrate are identical in

- A the gas released on heating the solids.
- B their reaction with hydrochloric acid.
- C the solid product of their thermal decomposition.
- D their solubility in water.

(Total for Question 5 = 1 mark)

6 The oxidation number of sulfur in potassium aluminium sulfate (potash alum),  $KAl(SO_4)_2 \cdot 12H_2O$ , is

- A -2
- B +2
- C +6
- D +8

(Total for Question 6 = 1 mark)

7 Which one of the following equations represents a halogen displacement reaction that can occur?

- A  $2KBr(aq) + I_2(aq) \rightarrow 2KI(aq) + Br_2(aq)$
- B  $2KCl(aq) + Br_2(aq) \rightarrow 2KBr(aq) + Cl_2(aq)$
- C  $2KF(aq) + Cl_2(aq) \rightarrow 2KCl(aq) + F_2(aq)$
- D  $2KBr(aq) + Cl_2(aq) \rightarrow 2KCl(aq) + Br_2(aq)$

(Total for Question 7 = 1 mark)

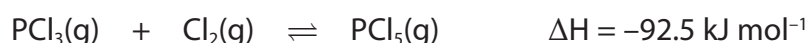


8 The silver halide which is insoluble in water but soluble in dilute aqueous ammonia is

- A AgCl
- B AgBr
- C AgI
- D AgAt

(Total for Question 8 = 1 mark)

9 Consider the following equilibrium.

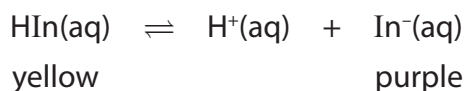


In which of the following would **both** the stated changes increase the amount of the product,  $\text{PCl}_5$ , present at equilibrium?

- A Decreasing temperature and decreasing pressure.
- B Decreasing temperature and increasing pressure.
- C Increasing temperature and increasing pressure.
- D Increasing temperature and decreasing pressure.

(Total for Question 9 = 1 mark)

10 Consider the following simplified equilibrium for an indicator, HIn.



Addition of a few drops of sodium carbonate solution would

- A make the colour of the equilibrium mixture turn purple and then yellow.
- B make the colour of the equilibrium mixture paler.
- C make the equilibrium mixture more yellow.
- D make the equilibrium mixture more purple.

(Total for Question 10 = 1 mark)



11 Which of the following species has the smallest bond angle?

- A CO<sub>2</sub>
- B H<sub>2</sub>O
- C SO<sub>3</sub>
- D H<sub>3</sub>O<sup>+</sup>

(Total for Question 11 = 1 mark)

12 Which of the following bonds is likely to be the most polar?

- A H–F
- B P–O
- C N–Cl
- D C–S

(Total for Question 12 = 1 mark)

13 A lump of malachite, CuCO<sub>3</sub>·Cu(OH)<sub>2</sub>, reacts with 40 cm<sup>3</sup> of 0.50 mol dm<sup>-3</sup> hydrochloric acid. The rate of reaction can be increased significantly by

- A increasing the pressure.
- B crushing the malachite lump.
- C replacing the acid with 80 cm<sup>3</sup> of 0.25 mol dm<sup>-3</sup> hydrochloric acid.
- D using a magnetic stirrer to agitate the mixture.

(Total for Question 13 = 1 mark)

14 Consider the following reaction carried out with 0.10 g of magnesium ribbon and excess hydrochloric acid.



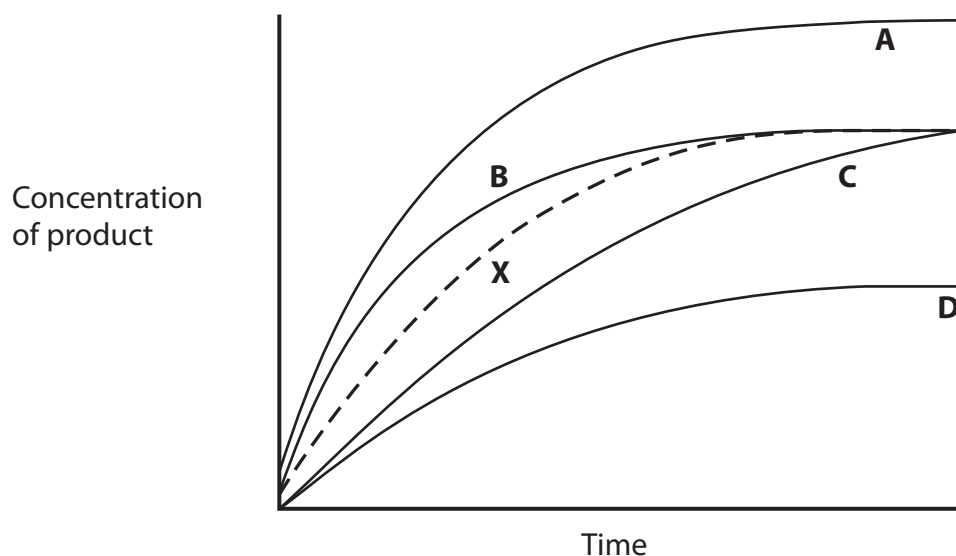
Which method should be used to follow the rate of this reaction?

- A Measure the pH of the solution, using a pH meter.
- B Measure the colour of the solution, using a colorimeter.
- C Measure the volume of gas being formed, using a gas syringe.
- D Measure the mass of the mixture, using a balance which weighs to two decimal places.

(Total for Question 14 = 1 mark)



- 15 In a reaction, the change in concentration of a product with time is shown by the dashed line **X** on the graph below.



Which of the lines, **A** to **D**, shows the effect of adding a catalyst to this reaction?

- A**
- B**
- C**
- D**

(Total for Question 15 = 1 mark)

- 16 Bromoethane reacts with concentrated alcoholic ammonia to produce ethylamine. However, in this reaction mixture, the ethylamine formed further reacts with the bromoethane to produce diethylamine.

This further reaction of ethylamine can best be limited by carrying out the reaction with

- A** iodoethane instead of bromoethane.
- B** less concentrated ammonia.
- C** excess bromoethane.
- D** excess ammonia.

(Total for Question 16 = 1 mark)



17 In the preparation of 1-bromobutane from butan-1-ol, it is preferable to react the sodium bromide with 50% sulfuric acid, rather than concentrated sulfuric acid.

The main reason for **not** using concentrated sulfuric acid is because it

- A makes the reaction too exothermic.
- B oxidizes HBr to Br<sub>2</sub>.
- C is a dehydrating agent.
- D is more hazardous.

(Total for Question 17 = 1 mark)

18 The reaction between aqueous hydroxide ions and a halogenoalkane to produce an alcohol is classified as

- A electrophilic substitution with heterolytic bond fission.
- B electrophilic substitution with homolytic bond fission.
- C nucleophilic substitution with heterolytic bond fission.
- D nucleophilic substitution with homolytic bond fission.

(Total for Question 18 = 1 mark)

19 Which of the following has the longest bond length?

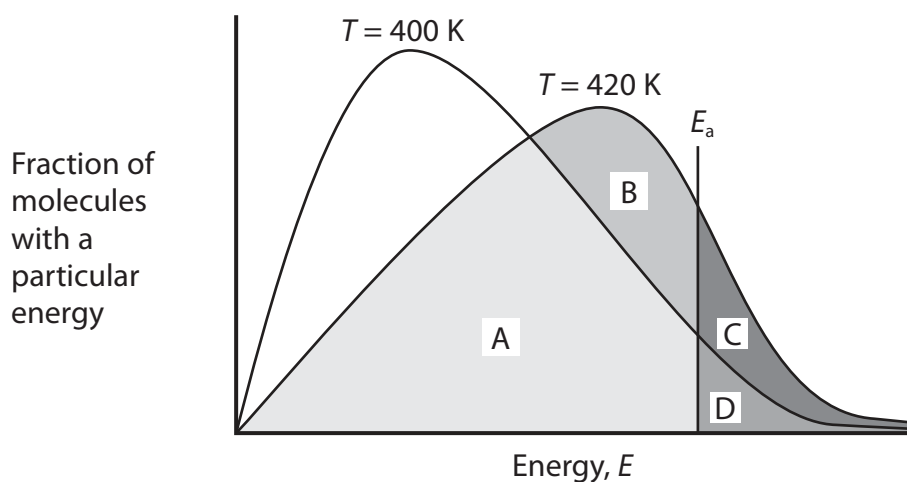
- A Cl—Cl
- B H—Cl
- C O=O
- D N≡N

(Total for Question 19 = 1 mark)



20 A Maxwell-Boltzmann distribution graph can be used to illustrate the effect of increasing temperature on the rate of a chemical reaction.

Which area on the graph below indicates the **increase** in the number of molecules that have sufficient energy to react, when the temperature changes from 400 K to 420 K?



- A Area B + C
- B Area C + D
- C Area C
- D Area D

(Total for Question 20 = 1 mark)

TOTAL FOR SECTION A = 20 MARKS





**BLANK PAGE**



## SECTION B

Answer ALL the questions. Write your answers in the spaces provided.

21 This is a question about an acid-base titration.

Potassium hydroxide, KOH, is used to assist in the removal of hair. For example, it is present in some pre-shave products and used in solutions for soaking animal skins prior to the removal of the animal hair.


The skin of a red-brown cow was soaked in a solution of potassium hydroxide containing 226.8 g of potassium hydroxide in 45.0 dm<sup>3</sup> of solution. After several hours, the skin was removed.

The residual solution, **R**, contained unreacted potassium hydroxide. In order to determine the potassium hydroxide concentration in **R**, 25.00 cm<sup>3</sup> samples of the solution were titrated with 0.0500 mol dm<sup>-3</sup> sulfuric acid.

Titration	Trial	1	2	3
Final volume / cm <sup>3</sup>	5.00	9.50	14.10	18.55
Initial volume / cm <sup>3</sup>	0.00	5.00	9.55	14.10
Volume added / cm <sup>3</sup>	5.00	4.50	4.55	4.45

Mean titre = 4.50 cm<sup>3</sup>

The equation for the reaction is:



(a) (i) Calculate the number of moles of sulfuric acid that react with 25.00 cm<sup>3</sup> of the potassium hydroxide solution **R**.

(1)

(ii) From your answer to (a)(i), deduce the number of moles of potassium hydroxide in the 25.00 cm<sup>3</sup> of solution **R**.

(1)



(iii) Calculate the concentration, in mol dm<sup>-3</sup>, of potassium hydroxide in the solution **R**.

(1)

(iv) Calculate the **difference** between the initial concentration of the potassium hydroxide used to soak the animal skin and the concentration of solution **R**, which you have calculated in (a)(iii).

Relative Atomic Masses: K = 39.1; O = 16; H = 1

(3)

Initial KOH Concentration .....

KOH concentration in solution **R** .....

Difference .....

(v) Calculate the total mass of potassium hydroxide used up in the soaking process. Give your answer to **three** significant figures.

(2)



(b) The indicator phenolphthalein could have been used for this titration.

(i) State the colour change you would expect at the end-point of a titration when sulfuric acid is added to potassium hydroxide using phenolphthalein.

(2)

From ..... to .....

(ii) Suggest why the particular skin used might make it difficult to accurately judge the end-point of the titration.

(1)

.....  
.....

(iii) Phenolphthalein is used as a solution in ethanol which is highly flammable. A student suggested that for safety reasons there should be no naked flames present during this titration.

Is this an appropriate suggestion? Justify your answer.

(1)

.....  
.....  
.....

(c) Titration experiments use equipment with a measurement uncertainty. For a pipette, the uncertainty is  $\pm 0.06 \text{ cm}^3$  on the volume measured. For each burette reading, the uncertainty is  $\pm 0.05 \text{ cm}^3$ .

(i) By calculating the percentage error for the burette titre value of  $4.50 \text{ cm}^3$ , and for the pipette volume of  $25.00 \text{ cm}^3$ , show that in this case the burette error is greater than the pipette error.

(2)

Burette titre % error .....

Pipette volume % error .....



(ii) Suggest **two** ways by which the percentage error for the burette titre could be reduced, without changing the apparatus.

(2)

1 .....

.....

2 .....

.....

(iii) The trial titre value was not included in the calculation of the mean.

In what circumstances could the trial value be used in the calculation of the mean?

(1)

.....

.....

**(Total for Question 21 = 17 marks)**



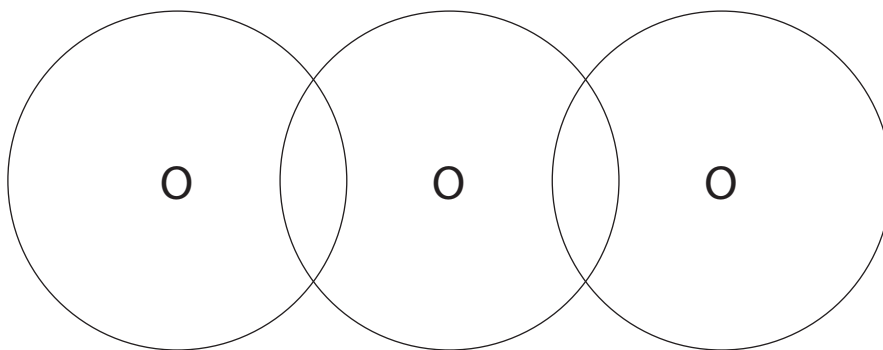
22 This is a question about environmental chemistry.

(a) Ozone,  $O_3$ , is a non-linear molecule present in the Earth's upper atmosphere. It absorbs ultraviolet radiation from the Sun and so protects living organisms from this type of radiation.

(i) Complete the dot and cross diagram for the ozone molecule. Show the outer electrons only.

Use dots (●) for the electrons of the left-hand oxygen atom, crosses (x) for the central oxygen atom and triangles (▲) for the right-hand oxygen atom.

(2)



(ii) Explain why ozone is a non-linear molecule.

(1)

.....

.....

(iii) State **one** harmful consequence to a person of increased exposure to ultraviolet radiation.

(1)

.....

.....

(iv) What property of ultraviolet radiation makes it more harmful than infrared radiation to living organisms? Justify your answer.

(1)

.....

.....





(ii) Suggest a gas, of which there is a significant concentration in the atmosphere, which does **not** absorb infrared radiation.

(1)

(iii) CFCs make a significant contribution to global warming, despite being present in only very small concentrations in the atmosphere. Suggest a reason for this.

(1)

(iv) Suggest why there is now little concern over the contribution of CFCs to global warming compared with that of carbon dioxide.

(1)

(v) Water vapour is another molecule in the atmosphere that absorbs infrared radiation, but it is not considered to be responsible for anthropogenic climate change. Justify this statement.

(2)

(vi) The term 'carbon neutrality' has become widely used with reference to biofuels. Use of biofuels is one of the measures employed in an attempt to stabilise the level of carbon dioxide in the atmosphere and hence to reduce climate change.

Explain the term 'carbon neutrality' and suggest why biofuels are unlikely to be completely carbon neutral.

(2)





(vii) Suggest **two** measures, other than the use of biofuels, by which the chemical industry could reduce its carbon footprint.

(2)

1 .....

.....

2 .....

.....

**(Total for Question 22 = 22 marks)**

---

**TOTAL FOR SECTION B = 39 MARKS**

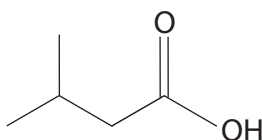


## SECTION C

Answer ALL the questions. Write your answers in the spaces provided.

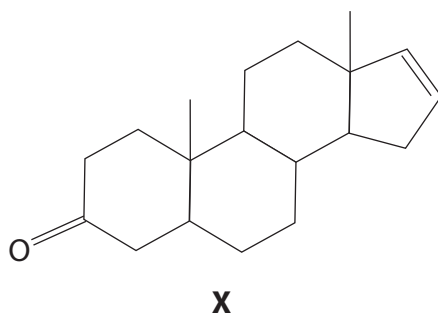
- 23 Some organic molecules, either on their own or as part of a mixture, contribute to some very unpleasant odours.

The molecule shown below, commonly called isovaleric acid, is responsible for the smell of sweaty feet.



Isovaleric acid can be used to produce esters that have important industrial uses in the pharmaceutical industry, as sedatives and tranquilizers, and in the food industry, as flavouring and fragrance additives.

The molecule with the systematic name (5 $\alpha$ )-androst-16-en-3-one, labelled **X** in this question, is found in human sweat and urine.



However, in other situations, these molecules can induce a very different effect. For example, **X** is present in commercial products used by pig farmers to determine when sows are ready for mating.

- (a) What is the systematic name for isovaleric acid?

(1)

- (b) What is the molecular formula of isovaleric acid?

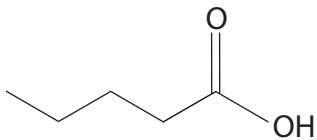
(1)



(c) Isovaleric acid has three structural isomers which are also carboxylic acids. One of these acids is drawn in the first box below.

In the empty boxes below, draw the structures, using **skeletal** formulae, of the other two carboxylic acid structural isomers of isovaleric acid.

(2)

 <p>valeric acid</p>		
-------------------------------------------------------------------------------------------------------	--	--

\*(d) At room temperature, valeric acid is a liquid. It is sparingly soluble in water and very soluble in ethanol.

Describe simple experiments you could carry out to show the different solubilities of valeric acid in these two solvents. No measurements are required, but you should state how you would make your experiments valid.

State the expected observations from your experiments.

(3)

.....

.....

.....

.....

.....

.....

.....

.....

.....



(e) Isoamyl alcohol is the alcohol from which isovaleric acid can be produced directly. This alcohol forms intermolecular hydrogen bonding.

Using the simplified representation R–O–H, draw a hydrogen bond between two alcohol molecules and clearly indicate the bond angle about the hydrogen involved in the hydrogen bond.

(2)

(f) There are also London forces between molecules of isoamyl alcohol.

\* (i) Describe how London forces are formed.

(2)

.....

.....

.....

.....

.....

(ii) The straight-chain structural isomer of isoamyl alcohol has a boiling temperature of 138°C.

Suggest whether the boiling temperature for isoamyl alcohol will be higher than, lower than or the same as the straight-chain isomer. Justify your choice.

(3)

.....

.....

.....

.....

.....

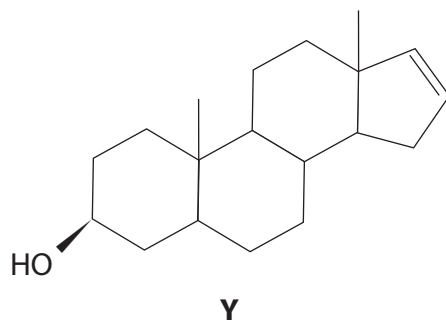
.....

.....

.....



- (g) The molecule identified as **X** in the introduction to question 23, can be formed from the alcohol **Y** shown below.



- (i) The oxidation of an alcohol of this type with acidified sodium dichromate(VI) could involve either reflux or distillation.

Explain why either could be used in this case.

(1)

.....

.....

.....

- (ii) An alternative reagent for the oxidation of an alcohol is acidified potassium manganate(VII),  $\text{KMnO}_4$ . However, this is likely to produce other products because **X** contains another functional group that could react with this reagent.

Name this other functional group in **X** and suggest the type of molecule formed in its reaction with acidified potassium manganate(VII),  $\text{KMnO}_4$ .

(2)

Functional group that reacts .....

Type of molecule formed .....



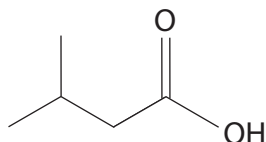
\*(h) Isovaleric acid and alcohol **Y** could react together to produce a compound with a pleasant aroma, but this can be masked by even a small residue of the starting molecules.

Generally, spectroscopic methods are much more reliable than sense of smell in detecting the presence of molecules.

The infrared absorption ranges associated with some functional groups are given below.

O—H stretching in alcohols	3750 – 3200 cm <sup>-1</sup>
O—H stretching in carboxylic acids	3300 – 2500 cm <sup>-1</sup>
C=O stretching in aldehydes	1740 – 1720 cm <sup>-1</sup>
C=O stretching in ketones	1700 – 1680 cm <sup>-1</sup>
C=O stretching in carboxylic acids, alkyl	1725 – 1700 cm <sup>-1</sup>
C—H stretching in alkane	2962 – 2853 cm <sup>-1</sup>
C—H stretching in alkene	3095 – 3010 cm <sup>-1</sup>

By quoting appropriate data, describe how both infrared spectroscopy and mass spectrometry could be used to determine the presence of **isovaleric acid**. The skeletal formula of isovaleric acid is shown below.



(4)

.....

.....

.....

.....

.....

.....

.....

.....

.....

.....

.....

.....

.....

.....

.....

.....

.....

.....

.....

.....

.....

.....

**(Total for Question 23 = 21 marks)**

**TOTAL FOR SECTION C = 21 MARKS**  
**TOTAL FOR PAPER = 80 MARKS**



**BLANK PAGE**



# The Periodic Table of Elements

	1	2											3	4	5	6	7	0 (8)																																																																																																																																																																																																																																																																																																																																																																																																																																																																																																																																																																																																																																																																																																																																																																																																																																																																																																																																																																																																																		
			(1)	(2)											(13)	(14)	(15)	(16)	(17)	(18)																																																																																																																																																																																																																																																																																																																																																																																																																																																																																																																																																																																																																																																																																																																																																																																																																																																																																																																																																																																																																
			Key																																																																																																																																																																																																																																																																																																																																																																																																																																																																																																																																																																																																																																																																																																																																																																																																																																																																																																																																																																																																																																	
			relative atomic mass																																																																																																																																																																																																																																																																																																																																																																																																																																																																																																																																																																																																																																																																																																																																																																																																																																																																																																																																																																																																																																	
			atomic symbol																																																																																																																																																																																																																																																																																																																																																																																																																																																																																																																																																																																																																																																																																																																																																																																																																																																																																																																																																																																																																																	
			name																																																																																																																																																																																																																																																																																																																																																																																																																																																																																																																																																																																																																																																																																																																																																																																																																																																																																																																																																																																																																																	
			atomic (proton) number																																																																																																																																																																																																																																																																																																																																																																																																																																																																																																																																																																																																																																																																																																																																																																																																																																																																																																																																																																																																																																	
	6.9	9.0	Li	Be	3	4	11	12	13	14	15	16	17	18	19	20	21	22	23	24	25	26	27	28	29	30	31	32	33	34	35	36	37	38	39	40	41	42	43	44	45	46	47	48	49	50	51	52	53	54	55	56	57	58	59	60	61	62	63	64	65	66	67	68	69	70	71	72	73	74	75	76	77	78	79	80	81	82	83	84	85	86	87	88	89	90	91	92	93	94	95	96	97	98	99	100	101	102	103	104	105	106	107	108	109	110	111	112	113	114	115	116	117	118	119	120	121	122	123	124	125	126	127	128	129	130	131	132	133	134	135	136	137	138	139	140	141	142	143	144	145	146	147	148	149	150	151	152	153	154	155	156	157	158	159	160	161	162	163	164	165	166	167	168	169	170	171	172	173	174	175	176	177	178	179	180	181	182	183	184	185	186	187	188	189	190	191	192	193	194	195	196	197	198	199	200	201	202	203	204	205	206	207	208	209	210	211	212	213	214	215	216	217	218	219	220	221	222	223	224	225	226	227	228	229	230	231	232	233	234	235	236	237	238	239	240	241	242	243	244	245	246	247	248	249	250	251	252	253	254	255	256	257	258	259	260	261	262	263	264	265	266	267	268	269	270	271	272	273	274	275	276	277	278	279	280	281	282	283	284	285	286	287	288	289	290	291	292	293	294	295	296	297	298	299	300	301	302	303	304	305	306	307	308	309	310	311	312	313	314	315	316	317	318	319	320	321	322	323	324	325	326	327	328	329	330	331	332	333	334	335	336	337	338	339	340	341	342	343	344	345	346	347	348	349	350	351	352	353	354	355	356	357	358	359	360	361	362	363	364	365	366	367	368	369	370	371	372	373	374	375	376	377	378	379	380	381	382	383	384	385	386	387	388	389	390	391	392	393	394	395	396	397	398	399	400	401	402	403	404	405	406	407	408	409	410	411	412	413	414	415	416	417	418	419	420	421	422	423	424	425	426	427	428	429	430	431	432	433	434	435	436	437	438	439	440	441	442	443	444	445	446	447	448	449	450	451	452	453	454	455	456	457	458	459	460	461	462	463	464	465	466	467	468	469	470	471	472	473	474	475	476	477	478	479	480	481	482	483	484	485	486	487	488	489	490	491	492	493	494	495	496	497	498	499	500	501	502	503	504	505	506	507	508	509	510	511	512	513	514	515	516	517	518	519	520	521	522	523	524	525	526	527	528	529	530	531	532	533	534	535	536	537	538	539	540	541	542	543	544	545	546	547	548	549	550	551	552	553	554	555	556	557	558	559	560	561	562	563	564	565	566	567	568	569	570	571	572	573	574	575	576	577	578	579	580	581	582	583	584	585	586	587	588	589	590	591	592	593	594	595	596	597	598	599	600	601	602	603	604	605	606	607	608	609	610	611	612	613	614	615	616	617	618	619	620	621	622	623	624	625	626	627	628	629	630	631	632	633	634	635	636	637	638	639	640	641	642	643	644	645	646	647	648	649	650	651	652	653	654	655	656	657	658	659	660	661	662	663	664	665	666	667	668	669	670	671	672	673	674	675	676	677	678	679	680	681	682	683	684	685	686	687	688	689	690	691	692	693	694	695	696	697	698	699	700	701	702	703	704	705	706	707	708	709	710	711	712	713	714	715	716	717	718	719	720	721	722	723	724	725	726	727	728	729	730	731	732	733	734	735	736	737	738	739	740	741	742	743	744	745	746	747	748	749	750	751	752	753	754	755	756	757	758	759	760	761	762	763	764	765	766	767	768	769	770	771	772	773	774	775	776	777	778	779	780	781	782	783	784	785	786	787	788	789	790	791	792	793	794	795	796	797	798	799	800	801	802	803	804	805	806	807	808	809	810	811	812	813	814	815	816	817	818	819	820	821	822	823	824	825	826	827	828	829	830	831	832	833	834	835	836	837	838	839	840	841	842	843	844	845	846	847	848	849	850	851	852	853	854	855	856	857	858	859	860	861	862	863	864	865	866	867	868	869	870	871	872	873	874	875	876	877	878	879	880	881	882	883	884	885	886	887	888	889	890	891	892	893	894	895	896	897	898	899	900	901	902	903	904	905	906	907	908	909	910	911	912	913	914	915	916	917	918	919	920	921	922	923	924	925	926	927	928	929	930	931	932	933	934	935	936	937	938	939	940	941	942	943	944	945	946	947	948	949	950	951	952	953	954	955	956	957	958	959	960	961	962	963	964	965	966	967	968	969	970	971	972	973	974	975	976	977	978	979	980	981	982	983	984	985	986	987	988	989	990	991	992	993	994	995	996	997	998	999	1000

Elements with atomic numbers 112-116 have been reported but not fully authenticated

\* Lanthanide series

\* Actinide series

